


Name _____

3




9

+

=

10

4




4

+

=

10

5




2

+

=

10

6





1

+

=

10

Directions   **Algebra** Have students draw yellow counters in the ten-frame to find the missing part of 10, and then write the missing number in the equation.